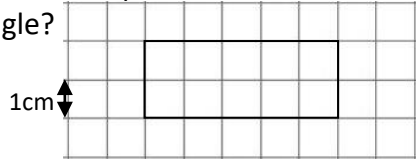



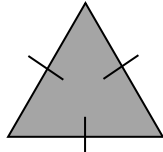


Name: \_\_\_\_\_

Date: \_\_\_\_\_

Class/Group: \_\_\_\_\_

A: Place Value, Add and Subtract		B: Multiply, Divide and Fractions		C: Measure and Geometry	
1. What is the missing number? 18 27 36 <input type="text"/> 54	4:1 <b>45</b>	11. $66 \div 6 =$	4:9 <b>11</b>	21. There are 650 millilitres of liquid in a jug. How much more liquid needs to be added to make 1 litre?	4:19 <b>350ml</b>
2. What is the missing number? 49 <input type="text"/> 63 70 77	4:1 <b>56</b>	12. Two factors of 32 add up to 33. What are they?	4:10 <b>1, 32</b>		
3. What is 1,000 <b>more</b> than 2,350?	4:2 <b>3,350</b>	13. $314 \times 7 =$	4:11 <b>2,198</b>	22. What is the perimeter of this rectangle? 	4:20 <b>14cm</b>
4. Round this number to the nearest 10: 3,275	4:2 <b>3,280</b>	14. In a class of 18 there are 2 girls for every 1 boy. How many are boys?	4:12 <b>6</b>		
5. What is $2 - 9$ ?	4:3 <b>-7</b>	15. $\frac{?}{3} = \frac{5}{15}$ 	4:13 <b>1</b>	23. At lunch, Kirsty has a starter and a main meal. She pays with a £20 note. How much change does she get? <input type="text"/> All Starters £4.95 <input type="text"/> All Mains £9.90	4:21 <b>£5.15</b>
6. What is the value of the <b>3</b> in this number? 3,296	4:4 <b>3000</b>	16. What is the missing number? <input type="text"/> 2.00 2.01 2.02 2.03	4:14 <b>1.99</b>		
7. Write the number 67 in Roman numerals.	4:5 <b>LXVII</b>	17. $\frac{5}{14} + \frac{8}{14}$	4:15 <b><math>\frac{13}{14}</math></b>	24. How would 6:15pm be shown on a 24 hour digital clock? 	4:22 <b>18:15</b>
8. $3,912 + 1,129 =$	4:6 <b>5,041</b>	18. Write 0.25 as a fraction.	4:16 <b><math>\frac{1}{4}</math></b>		
9. Write the sum to check $492 + 210 = 702$ : $702 - \square = \square$	4:7 <b>492, 210</b> 	19. $45 \div 10 =$	4:17 <b>4.5</b>	25. What is the special name for this type of triangle? 	4:23 <b>Equilateral</b>
10. I have £2. I spend £1.15 then 65p. How much do I have left?	4:8 <b>20p</b>	20. Round 5.6 to the nearest whole number.	4:18 <b>6</b>		
<b>Total (A)</b>		<b>Total (B)</b>		<b>Total (C)</b>	
<b>Test Total (A+B+C)</b>		<b>R (0-9)</b>	<b>Y (10-19)</b>	<b>G (20-25)</b>	