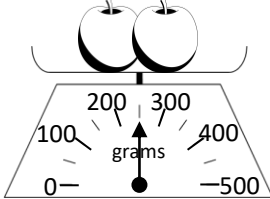
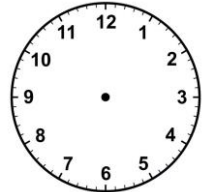
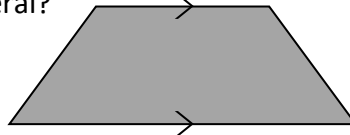
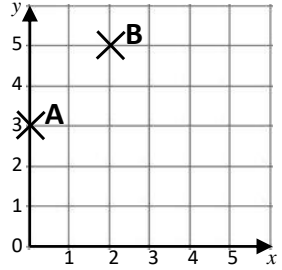


Name: _____

Date: _____

Class/Group: _____

A: Place Value, Add and Subtract		B: Multiply, Divide and Fractions		C: Measure and Geometry	
1. What is the missing number? 50 <input type="text"/> 100 125 150	4:1	11. $72 \div 12 =$	4:9	21. Two apples are weighed. How much does 1 apple weigh?	4:21
2. What is the missing number? 54 63 72 <input type="text"/> 90	4:1	12. Use $2 \times 4 \times 12 = 96$ to answer: 24×4	4:10		
3. What is 1,000 less than 4920?	4:2	13. $83 \times 7 =$	4:11	22. Draw the hands to show: 17:50	4:22
4. Round this number to the nearest 1,000: 1,543	4:2	14. Shop A sells 6 pens for £3. Shop B sells 2 pens for 90p. Which is cheaper?	4:12		
5. Put these numbers in order, smallest first: 3 -2 0	4:3	15. $\frac{1}{2} = \frac{\square}{4} = \frac{4}{\square}$	4:13	23. What is the name of this quadrilateral?	4:23
6. Put these in order, smallest first: 3,293 1,273 2,837	4:4	16. I have $\frac{1}{10}$ of a cake. How many pieces do I cut it into to make $\frac{1}{100}$?	4:14		
7. What number does this Roman Numeral represent? XIV	4:5	17. $\frac{11}{4} - \frac{9}{4}$	4:15	24. Plot the point (3, 0). Label it C.	4:28
8. $3,473 + 1,230 =$	4:6	18. Write $\frac{1}{100}$ as a decimal number.	4:16		
9. Write the sum to check $239 - 154 = 85$: $85 + \square = \square$	4:7	19. What is the value of the 2 in: 1.72	4:17	25. Points A, B and C form 3 corners of a rectangle. Plot the fourth corner of the rectangle and label it D.	4:28
10. A 38cm tall plant grows 16cm a year. How tall will it be after 2 years?	4:8	20. Round 7.8 to the nearest whole number.	4:18		
Total (A)		Total (B)		Total (C)	
Test Total (A+B+C)		R (0-9)	Y (10-19)	G (20-25)	